

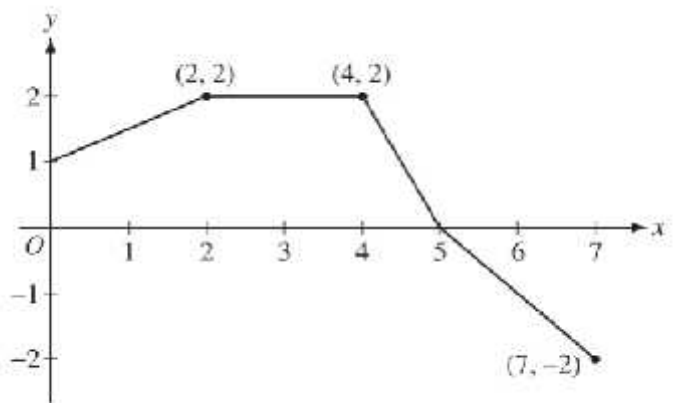
AP Calculus Test 4.1-4.3, No calculator

Multiple Choice

_____ 1. $\int \sec x \tan x dx =$ (A) $\sec x + C$ (B) $\tan x + C$ (C) $\frac{\sec^2 x}{2} + C$ (D) $\frac{\tan^2 x}{2} + C$ (E) $\frac{\sec^2 x \tan^2 x}{2} + C$

_____ 2. The function f is defined by $f(x) = \begin{cases} 2 & \text{for } x < 3 \\ x-1 & \text{for } x \geq 3 \end{cases}$. What is the value of $\int_1^5 f(x) dx$?
 (A) 2 (B) 6 (C) 8 (D) 10 (E) 12

_____ 3. The graph of a function f is shown at right. What is the value of $\int_0^7 f(x) dx$?
 (A) 6 (B) 8 (C) 10 (D) 14 (E) 18



Graph of f

x	0	2	4	6
$f(x)$	4	k	8	12

_____ 4. The function f is continuous on the closed interval $[0, 6]$ and has the values given in the table above. The trapezoidal approximation for $\int_0^6 f(x) dx$ found with 3 subintervals of equal length is 52. What is the value of k ?
 (A) 2 (B) 6 (C) 7 (D) 10 (E) 14

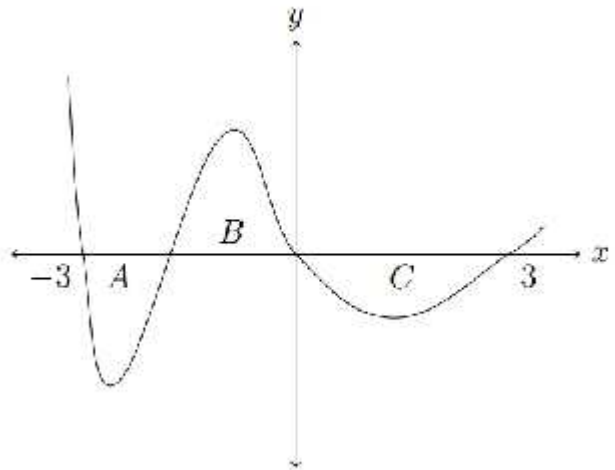
_____ 5. $\int (x^3 + 1)^2 dx =$ (A) $\frac{1}{7}x^7 + x + C$ (B) $\frac{1}{7}x^7 + \frac{1}{2}x^4 + x + C$ (C) $6x^2(x^3 + 1) + C$
 (D) $\frac{1}{3}(x^3 + 1)^3 + C$ (E) $\frac{(x^3 + 1)^3}{9x^2} + C$

_____ 6. $\int_1^4 |x-3| dx =$ (A) $-\frac{3}{2}$ (B) $\frac{3}{2}$ (C) $\frac{5}{2}$ (D) $\frac{9}{2}$ (E) 5

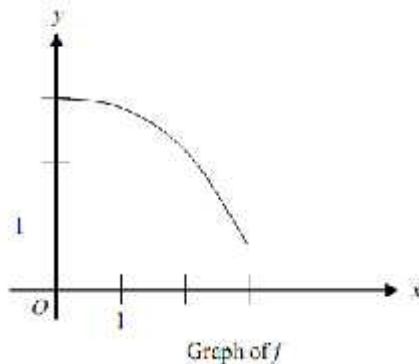
_____ 7. The regions A , B , and C in the figure at right are bounded by the graph of the function f and the x -axis. If the area of each region is 2, what is the

value of $\int_{-3}^3 (f(x)+1) dx$?

- (A) -2 (B) -1 (C) 2 (D) 4 (E) 7



_____ 8. The graph of the function f is shown below for $0 \leq x \leq 3$. Of the following, which has the least value?



(A) $\int_1^3 f(x) dx$

(B) Left Riemann sum approximation of $\int_1^3 f(x) dx$ with 4 subintervals of equal length

(C) Right Riemann sum approximation of $\int_1^3 f(x) dx$ with 4 subintervals of equal length

(D) Midpoint Riemann sum approximation of $\int_1^3 f(x) dx$ with 4 subintervals of equal length

(E) Trapezoidal sum approximation of $\int_1^3 f(x) dx$ with 4 subintervals of equal length

_____ 9. If $\int_{-5}^2 f(x) dx = -17$ and $\int_5^2 f(x) dx = -4$, what is the value of $\int_{-5}^5 f(x) dx$?

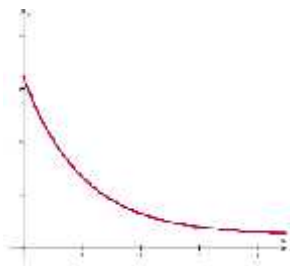
- (A) -21 (B) -13 (C) 0 (D) 13 (E) 21

- _____ 10. Let f and g be continuous functions for $a \leq x \leq b$. If $a < c < b$, $\int_a^b f(x) dx = P$, $\int_c^b f(x) dx = Q$, $\int_a^b g(x) dx = R$, and $\int_c^b g(x) dx = S$, then $\int_a^c (f(x) - g(x)) dx =$
- (A) $P - Q + R - S$ (B) $P - Q - R + S$ (C) $P - Q - R - S$ (D) $P + Q - R - S$ (E) $P + Q - R + S$

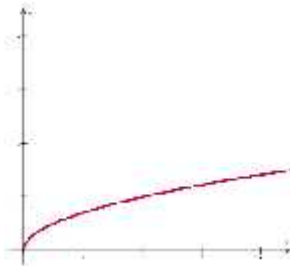
- _____ 11. If a trapezoidal sum over-approximates $\int_0^4 f(x) dx$, which of the following could be the graph of

$y = f(x)$?

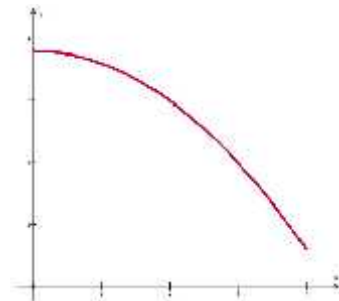
(A)



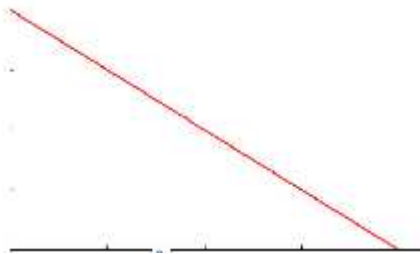
(B)



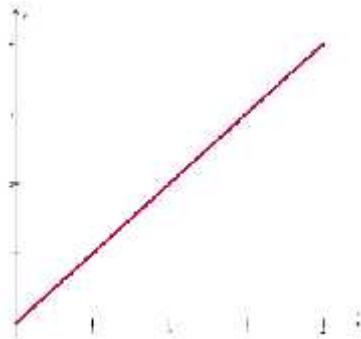
(C)



(D)



(E)



- _____ 12. The function f is continuous on the closed interval $[2,13]$ and has values as shown in the table below. Using the intervals $[2,3]$, $[3,5]$, $[5,8]$, and $[8,13]$, what is the approximation of $\int_2^{13} f(x) dx$ obtained from a left Riemann sum?

x	2	3	5	8	13
$f(x)$	6	-2	-1	3	9

- (A) 6 (B) 14 (C) 28 (D) 32 (E) 50

_____ 13. If $f(x) = g(x) + 7$ for $3 \leq x \leq 5$, then $\int_3^5 [f(x) + g(x)] dx =$

- (A) $2 \int_3^5 g(x) dx + 7$ (B) $2 \int_3^5 g(x) dx + 14$ (C) $2 \int_3^5 g(x) dx + 28$ (D) $\int_3^5 g(x) dx + 7$ (E) $\int_3^5 g(x) dx + 14$

_____ 14. The function f is continuous on the closed interval $[2, 14]$ and has values as show in the table below.

Using three subintervals indicated by the data, what is the approximation of $\int_2^{14} f(x) dx$ found by using a right Riemann sum?

x	2	5	10	14
$f(x)$	12	28	34	30

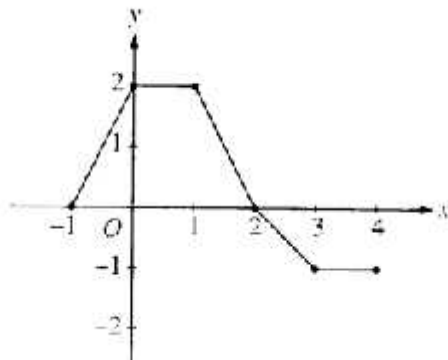
- (A) 296 (B) 312 (C) 343 (D) 374 (E) 390

_____ 15. The most general antiderivative of $f(x) = (\sec x) \left(\frac{\cot x}{\sin x} \right)$ is

- (A) $\sec x \tan x + C$ (B) $-\csc x \cot x + C$ (C) $-\cot x + C$ (D) $\cos x + C$

_____ 16. If $\int_{-1}^3 f(x) dx = 2$ and $\int_2^3 f(x) dx = -1$, find $\int_{-1}^2 [2f(x)] dx$

- (A) 2 (B) -3 (C) 3 (D) -6 (E) 6



_____ 17. The graph of a piecewise-linear function f , for $-1 \leq x \leq 4$, is shown above. What is the value of

- $\int_{-1}^4 f(x) dx$? (A) 1 (B) 2.5 (C) 4 (D) 5.5 (E) 8

_____ 18. If f is continuous for all x , which of the following integrals necessarily have the same value?

- I. $\int_a^b f(x) dx$ II. $\int_0^{b-a} f(x+a) dx$ III. $\int_{a+c}^{b+c} f(x+c) dx$

- (A) I and II only (B) I and III only (C) II and III only (D) I, II, and III (E) None

Short Answer: Evaluate the following indefinite integrals. Remember, rewriting is the key, and don't forget your $+C$.

Evaluate 4 of 6 of the following integrals (or get them all correct for amazing bonus points).

12. $\int e \csc x \tan^2 x dx$

13. $\int \frac{2}{5 \cdot 7^{-x}} dx$

14. $\int \left(\frac{4x + 3\sqrt[3]{x} - x^2}{2x} \right) dx$

15. $\int 2\sqrt{x}(3x-2)^2 dx$

16. $\int \left(\frac{4}{f x} - \frac{2}{\sin^2 x} \right) dx$

17. $\int \left(\frac{e^{-x} - 1}{e^{-x}} \right) dx$