

- | | |
|------|-------|
| 1. B | 6. C |
| 2. A | 7. A |
| 3. E | 8. B |
| 4. A | 9. D |
| 5. E | 10. C |

2

AB Review 02, Use your calculator ONLY on #11.

1. If $y = xy + x^2 + 1$, then when $x = -1$, $\frac{dy}{dx}$ is

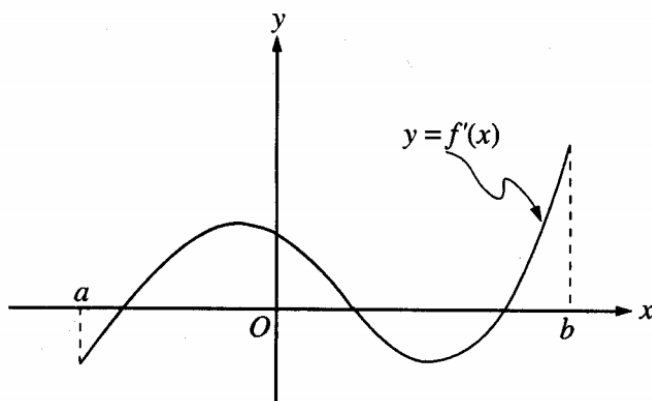
- (A) $\frac{1}{2}$ (B) $-\frac{1}{2}$ (C) -1 (D) -2 (E) nonexistent

2. If $f(x) = x^2 + 2x$, then $\frac{d}{dx}(f(\ln x)) =$

- (A) $\frac{2 \ln x + 2}{x}$ (B) $2x \ln x + 2$ (C) $2 \ln x + 2$ (D) $2 \ln x + \frac{2}{x}$ (E) $\frac{2x + 2}{x}$

3. Let f be the function defined by $f(x) = \begin{cases} x^3 & \text{for } x \leq 0 \\ x & \text{for } x > 0 \end{cases}$. Which of the following statements about f is true?

- (A) f is an odd function (B) f is discontinuous at $x = 0$ (C) f has a relative maximum
(D) $f'(0) = 0$ (E) $f'(x) > 0$ for $x \neq 0$



4. The graph of f' , the derivative of f , is shown in the figure above. Which of the following describes all relative extrema of f on the open interval (a, b) ?
- (A) One relative maximum and two relative minima
 (B) Two relative maxima and one relative minimum
 (C) Three relative maxima and one relative minimum
 (D) One relative maximum and three relative minima
 (E) Three relative maxima and two relative minima
5. An antiderivative for $\frac{1}{x^2 - 2x + 2}$ is
- (A) $-(x^2 - 2x + 2)^{-2}$ (B) $\ln(x^2 - 2x + 2)$ (C) $\ln\left|\frac{x-2}{x+1}\right|$ (D) $\text{Arcsec}(x-1)$ (E) $\text{Arctan}(x-1)$
6. The region enclosed by the x -axis, the line $x = 3$, and the curve $y = \sqrt{x}$ is rotated about the x -axis. What is the volume of the solid generated?
- (A) 3π (B) $3\sqrt{3}\pi$ (C) $\frac{9}{2}\pi$ (D) 9π (E) $\frac{36\sqrt{3}}{5}\pi$

7. $\int_0^{\sqrt{3}} \frac{dx}{\sqrt{4-x^2}} =$

- (A) $\frac{\pi}{3}$ (B) $\frac{\pi}{4}$ (C) $\frac{\pi}{6}$ (D) $\frac{1}{2}\ln 2$ (E) $-\ln 2$

8. If $\frac{dy}{dx} = 2y^2$ and if $y = -1$ when $x = 1$, then when $x = 2$, $y =$

Handwritten solution for Question 8:

$\frac{dy}{dx} = 2y^2 \Rightarrow \int \frac{1}{y^2} dy = \int 2 dx$

$\int y^{-2} dy = \int 2 dx$

$-y^{-1} = 2x + C$

$\frac{1}{y} = -2x + C$

At $(1, -1)$:

$-1 = \frac{1}{-1} = -2(1) + C$

$-1 = -2 + C$

$C = 1$

$\frac{1}{y} = -2x + 1$

At $x = 2$:

$\frac{1}{y} = -2(2) + 1 = -4 + 1 = -3$

$y = -\frac{1}{3}$

Options: (A) $-\frac{2}{3}$ (B) $-\frac{1}{3}$ (C) 0 (D) $\frac{1}{3}$ (E) $\frac{2}{3}$

9. The top of a 25-foot ladder is sliding down a vertical wall at a constant rate of 3 feet per minute. When the top of the ladder is 7 feet from the ground, what is the rate of change, in feet per minute, of the distance between the bottom of the ladder and the wall?

Handwritten solution for Question 9:

RR

Diagram: A right triangle with hypotenuse 25, vertical side y , and horizontal side x . $y = 7$, $x = 24$.

$\frac{dy}{dt} = -3$

$\frac{dx}{dt} = ?$

$x^2 + y^2 = 25^2$

$2x \frac{dx}{dt} + 2y \frac{dy}{dt} = 0$

$(24) \frac{dx}{dt} + (7)(-3) = 0$

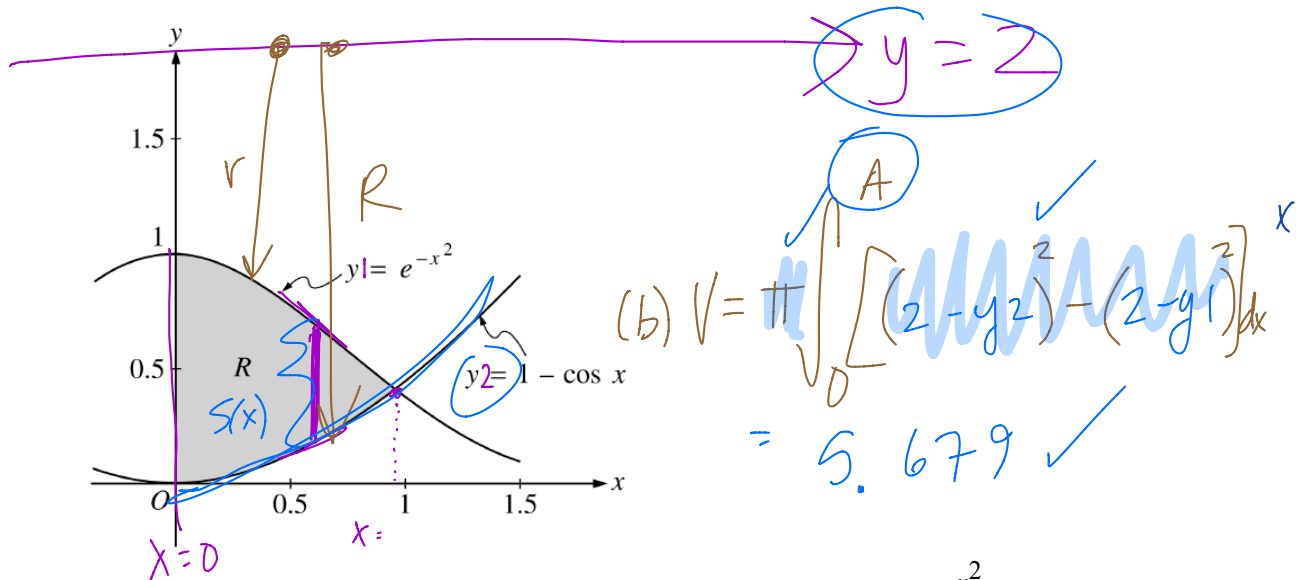
$24 \frac{dx}{dt} = 21$

$\frac{dx}{dt} = \frac{21}{24} = \frac{7}{8}$

Options: (A) $-\frac{7}{8}$ (B) $-\frac{7}{24}$ (C) $\frac{7}{24}$ (D) $\frac{7}{8}$ (E) $\frac{21}{25}$

10. At what value of x does the graph of $y = \frac{1}{x^2} - \frac{1}{x^3}$ have a point of inflection?

- (A) 0 (B) 1 (C) 2 (D) 3 (E) At no value of x



11. (2000-AB 1) Let R be the region in the first quadrant enclosed by the graphs of $y_1 = e^{-x^2}$, $y_2 = 1 - \cos x$, and the y -axis, as shown in the figure above.

(a) Find the area of the region.

$$\begin{aligned}
 & y_1 = y_2 \\
 & x = 0.941 = A \\
 & \text{Area} = \int_0^A (y_1 - y_2) dx \\
 & = 0.590
 \end{aligned}$$

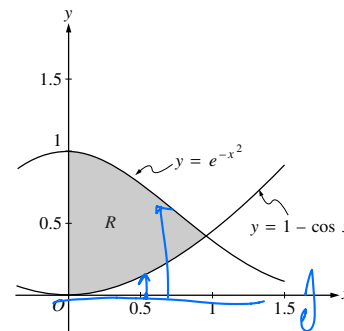
(b) Find the volume of the solid generated when the region R is revolved about the line $y = 2$.

(c) The region R is the base of a solid. For this solid, each cross section perpendicular to the x -axis is a semicircle. Find the volume of this solid.

$$\text{Vol} = \frac{\pi}{8} \int_0^A (y_1 - y_2)^2 dx$$

Let R be the shaded region in the first quadrant enclosed by the graphs of $y = e^{-x^2}$, $y = 1 - \cos x$, and the y -axis, as shown in the figure above.

- (a) Find the area of the region R .
- (b) Find the volume of the solid generated when the region R is revolved about the x -axis.
- (c) The region R is the base of a solid. For this solid, each cross section perpendicular to the x -axis is a square. Find the volume of this solid.



Region R

$$e^{-x^2} = 1 - \cos x \text{ at } x = 0.941944 = A$$

$$\begin{aligned} \text{(a) Area} &= \int_0^A (e^{-x^2} - (1 - \cos x)) dx \\ &= 0.590 \text{ or } 0.591 \end{aligned}$$

$$\begin{aligned} \text{(b) Volume} &= \pi \int_0^A \left((e^{-x^2})^2 - (1 - \cos x)^2 \right) dx \\ &= 0.55596\pi = 1.746 \text{ or } 1.747 \end{aligned}$$

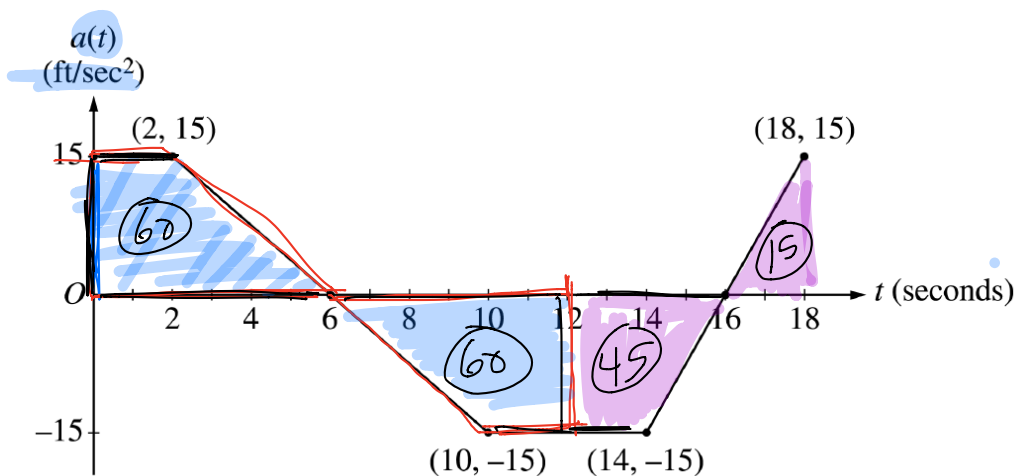
$$\begin{aligned} \text{(c) Volume} &= \int_0^A (e^{-x^2} - (1 - \cos x))^2 dx \\ &= 0.461 \end{aligned}$$

1 : Correct limits in an integral in (a), (b), or (c).

2 { 1 : integrand
1 : answer

3 { 2 : integrand and constant
< - 1 > each error
1 : answer

3 { 2 : integrand
< - 1 > each error
Note: 0/2 if not of the form
 $k \int_c^d (f(x) - g(x))^2 dx$
1 : answer



12. (2001, AB-3) A car is traveling on a straight road with velocity 55 ft/sec at time $t=0$. For $0 \leq t \leq 18$ seconds, the car's acceleration $a(t)$, in ft/sec², is a piecewise linear function defined by the graph at right.

(a) Is the velocity of the car increasing at $t=2$ seconds? Why or why not?

$$\underline{v'(2) = a(2) = 15 > 0}$$

so velocity of car is increasing at $t=2$ seconds.

(b) At what time in the interval $0 \leq t \leq 18$, other than $t=0$, is the velocity of the car 55 ft/sec? Why?

Velocity at t :

- $t=0 \rightarrow 55 \text{ ft/sec}$
- $t=6 \rightarrow 55 + 60 = 115 \text{ ft/sec}$
- $t=12 \rightarrow 115 - 60 = 55 \text{ ft/sec}$
- $t=16 \rightarrow 55 - 45 = 10 \text{ ft/sec}$
- $t=18 \rightarrow 10 + 15 = 25 \text{ ft/sec}$

At $t=12$ sec, the car's velocity is also 55 ft/sec since $\int_0^{12} a(t) dt = 0$

(c) On the time interval $0 \leq t \leq 18$, what is the car's absolute maximum velocity, in ft/sec, and at what time does it occur? Justify your answer.

from part b), the absolute max velocity is 115 ft/sec at $t=6$ sec.

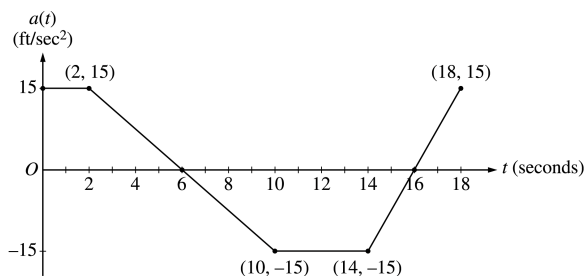
(d) At what times in the interval $0 \leq t \leq 18$, if any, is the car's velocity equal to zero? Justify your answer.

At NO time on $0 \leq t \leq 18$ sec is the car's velocity zero, since from part b), the min velocity is 10 ft/sec (by EVT)

AP[®] CALCULUS AB
2001 SCORING GUIDELINES

Question 3

A car is traveling on a straight road with velocity 55 ft/sec at time $t = 0$. For $0 \leq t \leq 18$ seconds, the car's acceleration $a(t)$, in ft/sec², is the piecewise linear function defined by the graph above.



- (a) Is the velocity of the car increasing at $t = 2$ seconds? Why or why not?
- (b) At what time in the interval $0 \leq t \leq 18$, other than $t = 0$, is the velocity of the car 55 ft/sec? Why?
- (c) On the time interval $0 \leq t \leq 18$, what is the car's absolute maximum velocity, in ft/sec, and at what time does it occur? Justify your answer.
- (d) At what times in the interval $0 \leq t \leq 18$, if any, is the car's velocity equal to zero? Justify your answer.

(a) Since $v'(2) = a(2)$ and $a(2) = 15 > 0$, the velocity is increasing at $t = 2$ sec

1 : answer and reason

(b) At time $t = 12$ because

$$v(12) - v(0) = \int_0^{12} a(t) dt = 0.$$

2 : $\left\{ \begin{array}{l} 1 : t = 12 \\ 1 : \text{reason} \end{array} \right.$

(c) The absolute maximum velocity is 115 ft/sec at $t = 6$.

The absolute maximum must occur at $t = 6$ or at an endpoint.

$$\begin{aligned} v(6) &= 55 + \int_0^6 a(t) dt \\ &= 55 + 2(15) + \frac{1}{2}(4)(15) = 115 > v(0) \\ \int_6^{18} a(t) dt &< 0 \text{ so } v(18) < v(6) \end{aligned}$$

4 : $\left\{ \begin{array}{l} 1 : t = 6 \\ 1 : \text{absolute maximum velocity} \\ 1 : \text{identifies } t = 6 \text{ and } \\ \quad t = 18 \text{ as candidates} \\ \text{or} \\ \text{indicates that } v \text{ increases,} \\ \quad \text{decreases, then increases} \\ 1 : \text{eliminates } t = 18 \end{array} \right.$

(d) The car's velocity is never equal to 0. The absolute minimum occurs at $t = 16$ where

$$v(16) = 115 + \int_6^{16} a(t) dt = 115 - 105 = 10 > 0.$$

2 : $\left\{ \begin{array}{l} 1 : \text{answer} \\ 1 : \text{reason} \end{array} \right.$

